


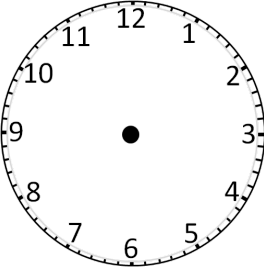
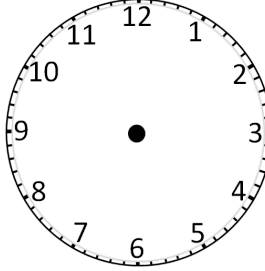


<b>GRADE: IV</b> <b>Date:</b> <b>08/01/2024</b>	<b>CPE 2 (2023-24)</b> <b>MATHS</b>	<b>Marks: 20</b> <b>Time: 50 minutes</b>
---	--	---

Name:

Class & Section:

Q.No.	Questions	Mark
<b>Section A</b>		
<b>Choose the correct answer:</b>		
<b>1</b>	9 centimeters = _____ millimeters a) 90 b) 900 c) 9000 d) None of these	<b>1</b>
<b>2</b>	7 litre = _____ millilitres a) 70 b) 700 c) 7000 d) 7	<b>1</b>
<b>3</b>	 <p>What is the time shown on the given clock? a) 2:09      b) 3:45      c) 2:45      d) 9:14</p>	<b>1</b>
<b>Match the following:</b>		
<b>4</b>	(i) Length (a) 08:30 hours (ii) Volume (b) 23:45 hours (iii) 11:45 pm (c) Litres (iv) 08:30 am (d) Meters	<b>4</b>
<b>Fill in the blanks:</b>		
<b>5</b>	1 kilogram = _____ gram	<b>1</b>
<b>6</b>	1 litre = _____ milliliters	<b>1</b>
<b>7</b>	Write whether the time 2:30 am is in the morning, afternoon, or night	<b>1</b>
<b>Section B</b>		
<b>8</b>	5 kg 210 g + 12 kg 30 g =	<b>1</b>
<b>9</b>	18 m 52 cm + 6 m 15 cm =	<b>1</b>
<b>10</b>	16 kg 530 g - 4 kg 200 g =	<b>1</b>
<b>11</b>	18 m 52 cm - 6 m 15 cm =	<b>1</b>

<b>12</b>	Read the event and write the time using am or pm: Tom goes for a walk with his father at 6:30 in the morning every day.	<b>1</b>
<b>13</b>	Convert the time from 24- hour to 12-hour format: 16:10 hours	<b>1</b>
<b>14</b>	Rupa has to put up 10 banners for an event. Each banner is 320 cm in length. What is the total length of all the banners? Express in meters.	<b>2</b>
<b>15</b>	<p>Draw the given time on the clock.</p> <div style="display: flex; justify-content: space-around; align-items: center;"> <div style="text-align: center;">  <p>8:10</p> </div> <div style="text-align: center;">  <p>11:38</p> </div> </div>	<b>2</b>

Prepared by : Mr.Johnson

Checked by : HOD /HOS .....